

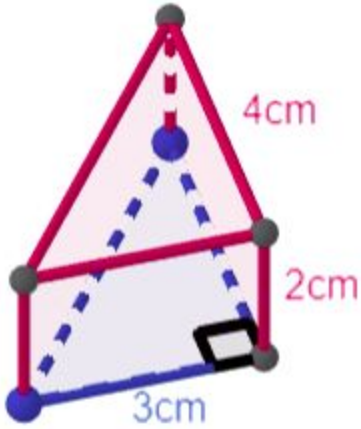
Name:

Block:

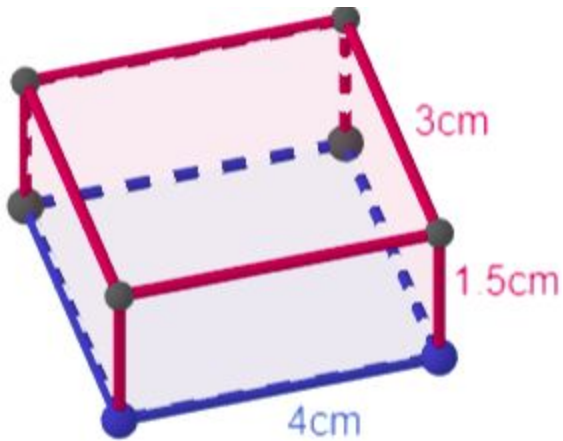
Surface Area 2 - Nets and Surface Area

Draw proportional nets for the following shapes. Appropriate measurements should be included for each side-length, with hash marks to indicate equal side-lengths. Then, compute the surface area of each shape to one decimal place.

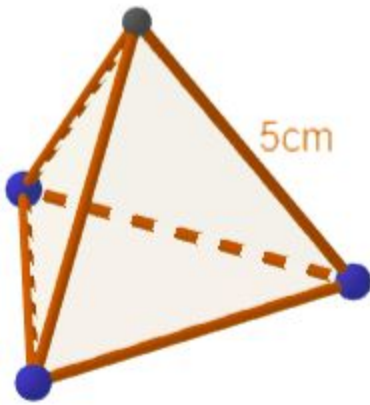
(triangular prism)



(rectangular prism) Label all sides properly!



(tetrahedron) (all faces congruent)



(cube)

